

SUNSHINE MATH - 2  
Earth, XII


Name: \_\_\_\_\_  
(This shows my own thinking.)

- ★★ 1. Bill found 7 snakes and 16 frogs on Saturday. That night 3 of the snakes and 12 of the frogs escaped into the woods. How many animals did Bill have left?

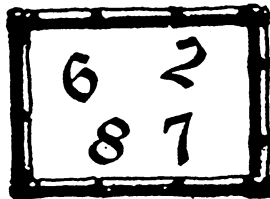


Answer: \_\_\_\_\_ animals

- ★★★★ 2. Help Crocky, the baby crocodile, travel across the pond. Fill in the missing number on the first lily pad.


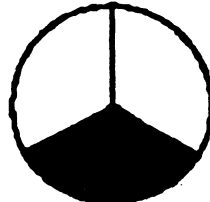
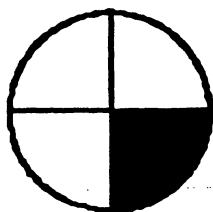


- ★ 3. How many different 2-digit numerals can be made from the digits below? Do not count 22, 66, 77, and 88.



Answer: There are \_\_\_\_\_ 2-digit numerals that can be made from those shown to the left.

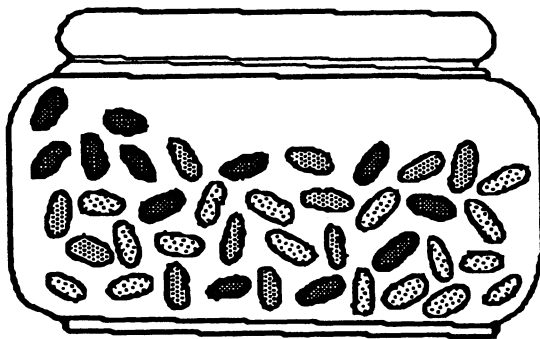
- ★ 4. Show the fraction of each circle that is shaded in. Put the fraction in the box beside the circle.



- ★★ 5. Write the missing letters in the empty boxes below. Be sure to write them in the position that follows the pattern.

A	J	D	R		S	
Y	C	D				E
A	J		R	F		

- ★ 6. Count the jelly beans in the jar. Is the total number of jelly beans an *odd* number, or an *even* number?



Answer:

There are \_\_\_\_\_ jellybeans.  
This is an \_\_\_\_\_ number.

- ★ 7. How many minutes in 2 hours?

Answer: \_\_\_\_\_ minutes

- ★★★ 8. The Jones kids got a dime each day they made up their beds. One week Marsha earned 40¢, Danny earned 50¢, Molly earned 40¢, and Bruce earned 20¢. Make a pictograph to show how much money each kid earned.

Marsha:

Danny:

Molly:

Bruce:

Key:

