

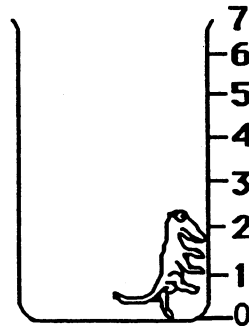
SUNSHINE MATH - 2
Earth, IX

Name: _____
(This shows my own thinking.)

- ★★★ 1. A lizard fell into a 7-foot hole. Each hour the lizard crawled 2 feet up, but then stopped for a moment to rest and fell back 1 foot. Then he climbed again. How many hours did it take for the lizard to get out of the hole?

Hint: Draw a picture of the lizard's trip.

Answer: ____ hours



- ★★ 2. How much time did Howard spend watching T. V.? Use the chart to help you.

Howard's Saturday Schedule	
Play outside	8:30 - 11:15
Watch T.V.	11:15 - 12:15
Eat lunch	12:15 - 12:30
Watch T.V.	12:30 - 1:30
Play inside	1:30 - 5:00
Eat dinner	5:00 - 5:30
Watch T.V.	5:30 - 7:30

Answer: _____ hours

- ★★ 3. Ricardo earns \$2.50 each week for his allowance. How much will he have at the end of four weeks?


Answer: _____

- ★★ 4. What is the mass of the hot dog and bun? Circle your answer.



- a. 50 grams
- b. less than 50 grams
- c. more than 50 grams

- ★★★★ 5. The pattern below repeats the same four figures. Draw the 15th figure in the pattern:



Answer: The 15th figure is:


- ★★ 6. Sam covered the baby's footprint with his thumb. About how many of Sam's thumb prints would it take to cover this foot shape?

Sam's thumb print: 



Answer: about _____ thumb prints

- ★★★★ 7. Maria weighed her two identical puppies. How much did each puppy weigh?



Answer: _____ pounds